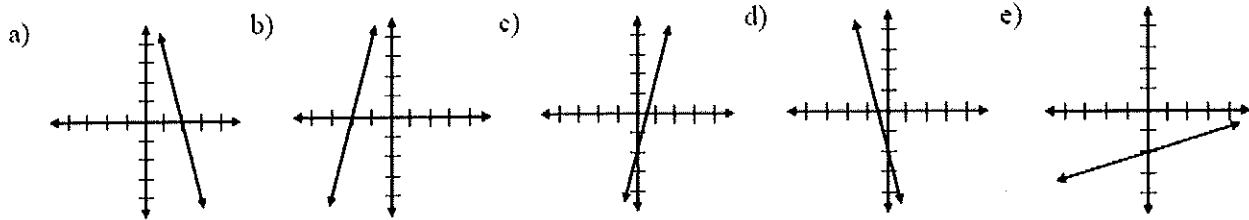


Practice

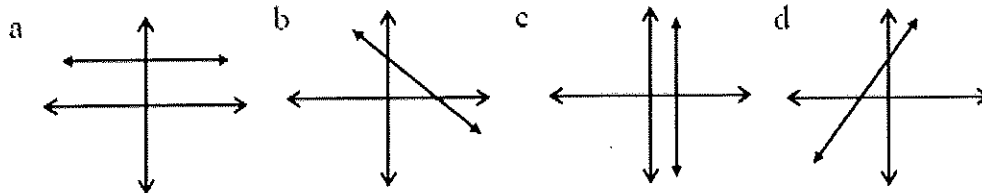
Equations of Lines: Slope and y-intercept

Answer these problems, then check your answers using the key on the next page. If you missed something, look at the solutions after the answer key, and if you still don't understand, watch the review video again.

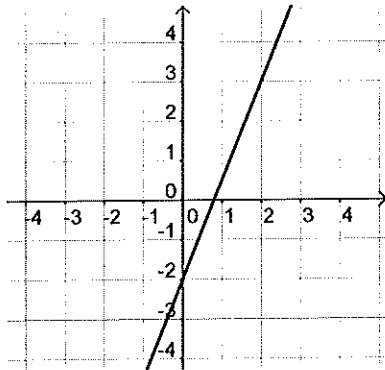
#1) The function $y = 4x - 2$ is represented by which graph?



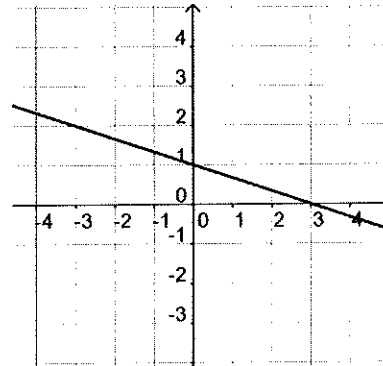
#2) State whether each graph's slope is positive, negative, zero, or undefined:



#3) What is the slope of this graph?



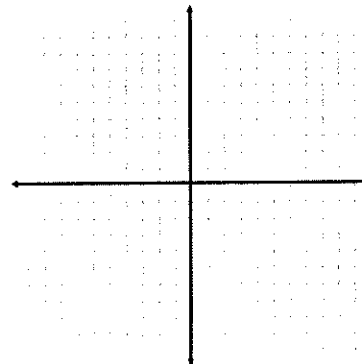
#4) What is the slope of this graph?



#5) Find the slope and y-intercept, and graph: $2x + 3y = 24$

slope

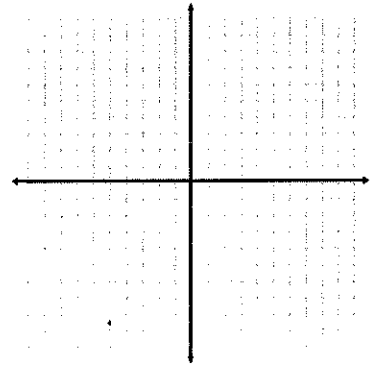
y-intercept



#6) Find the slope and y-intercept, and graph: $4x - y - 5 = 0$

slope

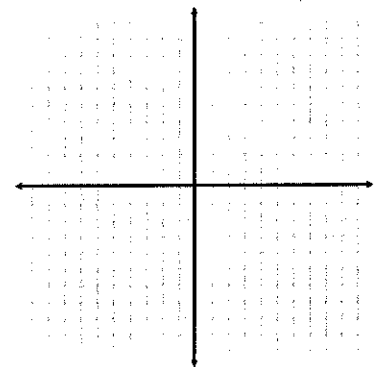
y-intercept



#7) Find the slope and y-intercept, and graph: $2y + 16 = 0$

slope

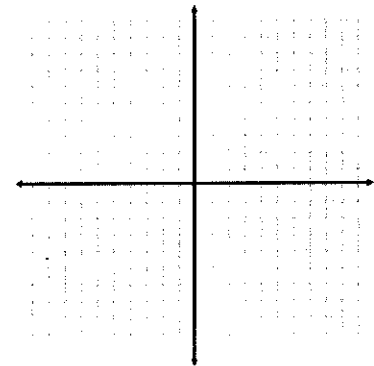
y-intercept



#8) Find the slope and y-intercept, and graph: $3x = 9$

slope

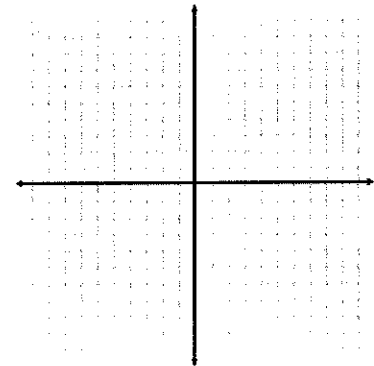
y-intercept



#9) Find the slope and y-intercept, and graph: $4x - (2y - 6) = 0$

slope

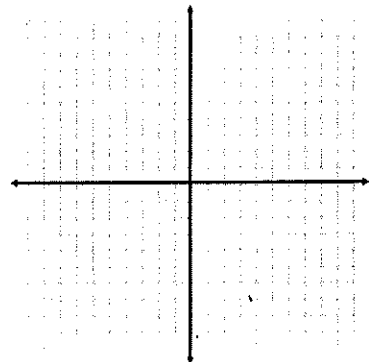
y-intercept



#10) Find the slope and y-intercept, and graph: $y = \frac{5}{6}x - 1$

slope

y-intercept



Answers:

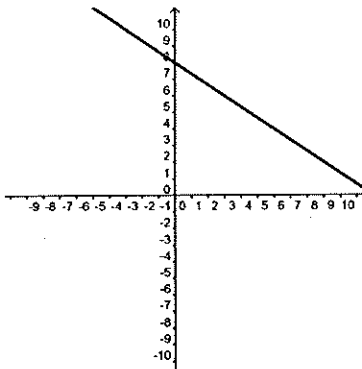
#1) c

#2) a) zero b) negative c) undefined d) positive

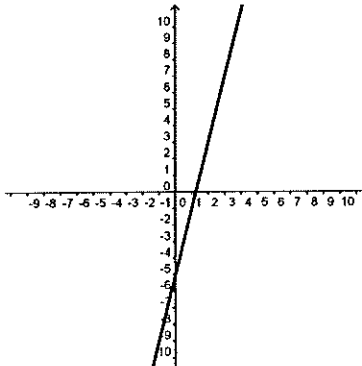
#3) $slope = \frac{5}{2}$

#4) $slope = -\frac{1}{3}$

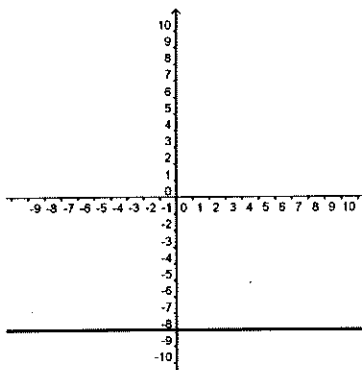
#5) $slope : -\frac{2}{3}$ y -intercept : $(0, 8)$



#6) $slope : 4$ y -intercept : $(0, -5)$

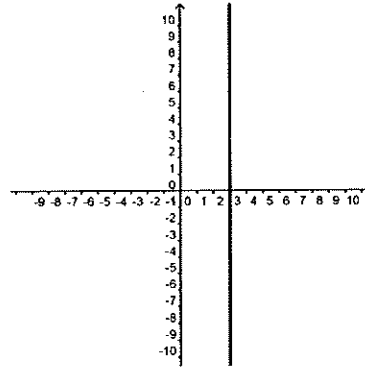


#7) $slope : 0$ y -intercept : $(0, -8)$

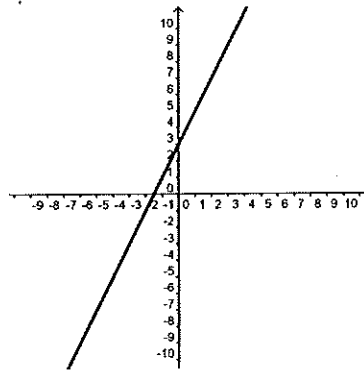


#8)

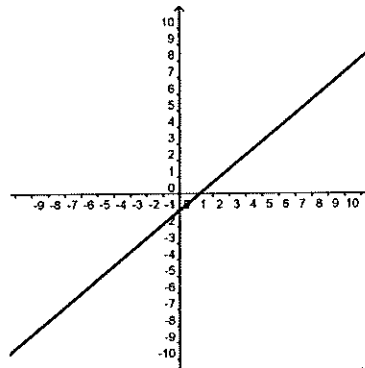
slope : undefined y - intercept : no y - intercept



#9) slope : 2 y - intercept : (0, 3)

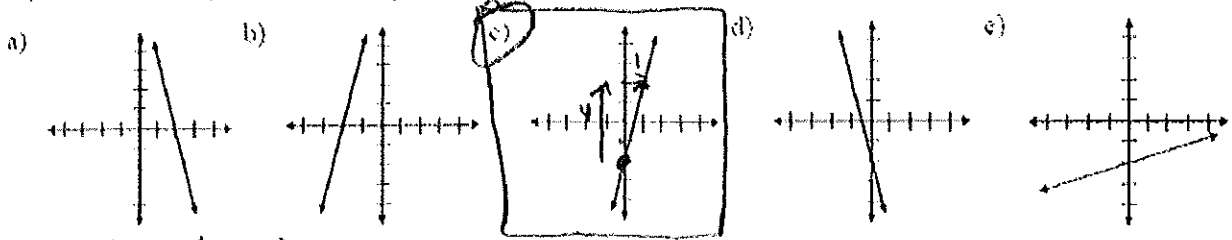


#10) slope : $\frac{5}{6}$ y - intercept : (0, -1)



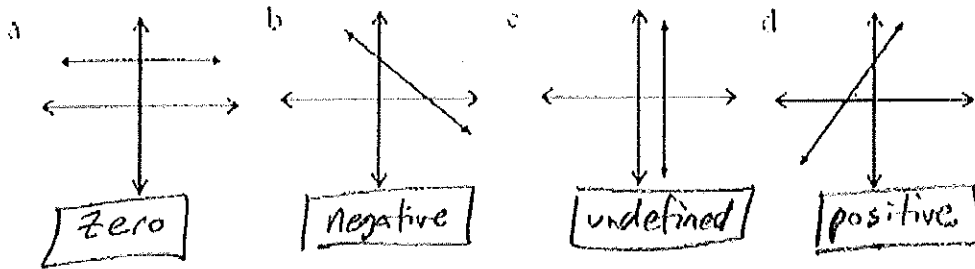
Solutions:

#1) The function $y = 4x - 2$ is represented by which graph?

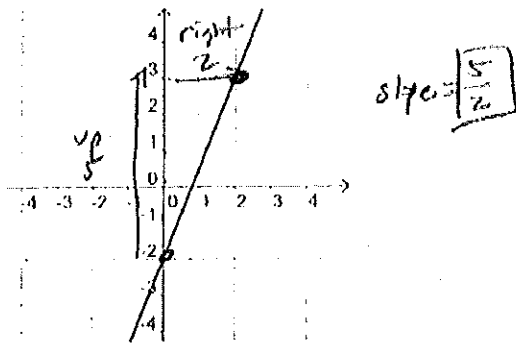


y-int: $(0, -2)$
slope: 4

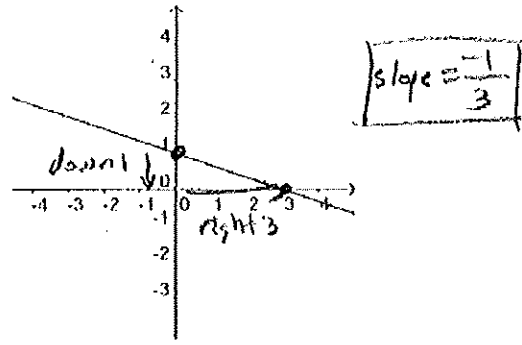
#2) State whether each graph's slope is positive, negative, zero, or undefined:



#3) What is the slope of this graph?



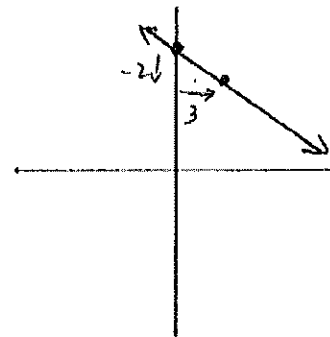
#4) What is the slope of this graph?



#5) Find the slope and y-intercept, and graph: $2x + 3y = 24$
convert to $y = mx + b$ form:

$$\begin{array}{r}
 2x + 3y = 24 \\
 -2x \quad -2x \\
 \hline
 3y = -2x + 24 \\
 \frac{3y}{3} = \frac{-2x + 24}{3} \\
 y = -\frac{2}{3}x + 8 \\
 \uparrow \quad \uparrow \\
 \text{slope} \quad \text{y-int}
 \end{array}$$

slope $\boxed{\text{slope} = -\frac{2}{3}}$ y-intercept $\boxed{(0, 8)}$

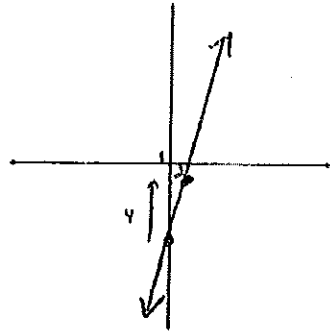


#6) Find the slope and y-intercept, and graph: $4x - y - 5 = 0$

$$\begin{array}{r} 4x - y - 5 = 0 \\ \quad +y \quad +y \\ \hline 4x - 5 = y \\ y = 4x - 5 \end{array}$$

slope
slope = 4

y-intercept
(0, -5)

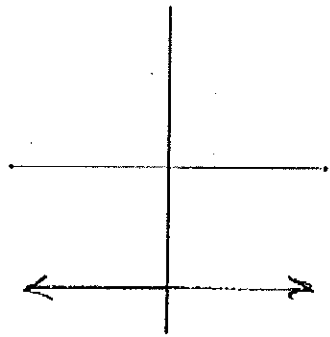


#7) Find the slope and y-intercept, and graph: $2y + 16 = 0$

$$\begin{array}{r} 2y + 16 = 0 \\ \quad -16 \quad -16 \\ \hline 2y = -16 \\ \frac{2y}{2} = \frac{-16}{2} \\ y = -8 \end{array}$$

slope
no x term
slope = 0
horizontal line

y-intercept
(0, -8)

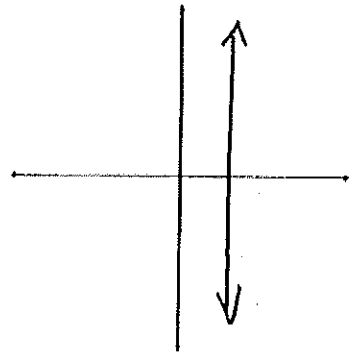


#8) Find the slope and y-intercept, and graph: $3x = 9$

$$\begin{array}{r} 3x = 9 \\ \frac{3x}{3} = \frac{9}{3} \\ x = 3 \end{array}$$

slope
no y-term
vertical line
slope undefined

y-intercept
no x-intercept

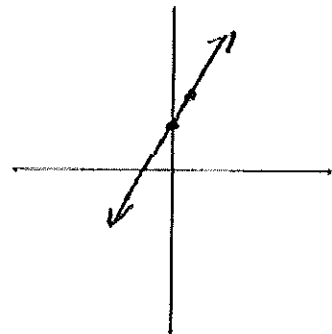


#9) Find the slope and y-intercept, and graph: $4x - (2y - 6) = 0$

$$\begin{array}{r} 4x - (2y - 6) = 0 \\ 4x - 2y + 6 = 0 \\ \quad +2y \quad +2y \\ \hline 4x + 6 = 2y \\ \frac{2y}{2} = \frac{4x + 6}{2} \\ y = 2x + 3 \end{array}$$

slope
slope = 2

y-intercept
(0, 3)



#10) Find the slope and y-intercept, and graph: $y = \frac{5}{6}x - 1$

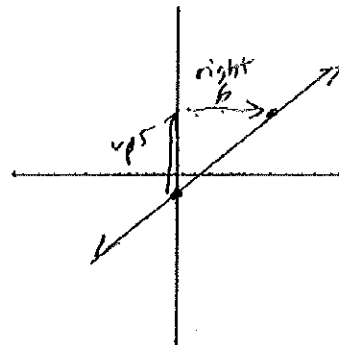
← slope
↙ y int

slope

$$\boxed{\text{slope} = \frac{5}{6}}$$

y-intercept

$$\boxed{(0, -1)}$$



up 5
right 6